






classify simple acids, bases, and salts based on their characteristics, name, and formula (319-2)

Devoir #6 – Les acides et les bases

Balance chacune des équations squelettes. Ensuite détermine si la substance à gauche de l'équation est un acide ou une base. Souligne les acides en rouge et les bases en bleu. Ensuite nommez chaque acide et chaque base.



Expliquez la neutralisation.